



CHEMISTRY

Higher Level

Tuesday 16 November 1999 (afternoon)

Paper 1

1 hour

This examination paper consists of 40 questions.

Each question offers 4 suggested answers.

The maximum mark for this paper is 40.

INSTRUCTIONS TO CANDIDATES

Do NOT open this examination paper until instructed to do so.

Answer ALL questions.

For each question, choose the answer you consider to be the best and indicate your choice on the answer sheet provided.

Calculators are NOT permitted for this examination paper.

EXAMINATION MATERIALS

Required:

Optically Mark Read (OMR) answer sheet

Allowed:

A simple translating dictionary for candidates not working in their own language

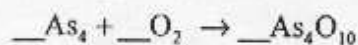
Periodic Table

Atomic Number		Atomic Mass	
1 H 1.01	2 He 4.00	3 Li 6.94	4 Be 9.01
5 B 10.81	6 C 12.01	7 N 14.01	8 O 16.00
9 F 19.00	10 Ne 20.18	11 Na 22.99	12 Mg 24.31
13 Al 26.98	14 Si 28.09	15 P 30.97	16 S 32.06
17 Cl 35.45	18 Ar 39.95	19 K 39.10	20 Ca 40.08
21 Sc 44.96	22 Ti 47.90	23 V 50.94	24 Cr 52.00
25 Mn 54.94	26 Fe 55.85	27 Co 58.93	28 Ni 58.71
29 Cu 63.55	30 Zn 65.37	31 Ga 69.72	32 Ge 72.59
33 As 74.92	34 Se 78.96	35 Br 79.90	36 Kr 83.80
37 Rb 85.47	38 Sr 87.62	39 Y 88.91	40 Zr 91.22
41 Nb 92.91	42 Mo 95.94	43 Tc 98.91	44 Ru 101.07
45 Rh 102.91	46 Pd 106.42	47 Ag 107.87	48 Cd 112.40
49 In 114.82	50 Sn 118.69	51 Sb 121.75	52 Te 127.60
53 I 126.90	54 Xe 131.30	55 Cs 132.91	56 Ba 137.34
57 [†] La 138.91	58 Ce 140.12	59 Pr 140.91	60 Nd 144.24
61 Pm 146.92	62 Sm 150.35	63 Eu 151.96	64 Gd 157.25
65 Tb 158.92	66 Dy 162.50	67 Ho 164.93	68 Er 167.26
69 Tm 168.93	70 Yb 173.04	71 Lu 174.97	72 Hf 178.49
73 Ta 180.95	74 W 183.85	75 Re 186.21	76 Os 190.21
77 Ir 192.22	78 Pt 195.09	79 Au 196.97	80 Hg 200.59
81 Tl 204.37	82 Pb 207.19	83 Bi 208.98	84 Po (210)
85 At (210)	86 Rn (222)	87 Fr (223)	88 Ra (226)
89 [‡] Ac (227)	90 Th 232.04	91 Pa 231.04	92 U 238.03
93 Np (237)	94 Pu (242)	95 Am (243)	96 Cm (247)
97 Bk (247)	98 Cf (251)	99 Es (254)	100 Fm (257)
101 Md (258)	102 No (259)	103 Lr (260)	104 Rf (261)
105 Db (262)	106 Sg (263)	107 Bh (262)	108 Hs (262)
109 Mt (262)	110 Ds (265)	111 Rg (266)	112 Uub (269)

1. What is the empirical formula for a compound with the molecular formula $C_6H_3(NO_2)_3$?

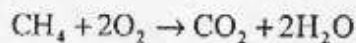
- A. CHNO
- B. C_2HNO_2
- C. $(C_2HNO_2)_3$
- D. $C_6H_3N_3O_6$

2. Arsenic, As_4 , reacts with oxygen to produce the oxide As_4O_{10} . What is the **sum** of the coefficients for the **reactants** in the balanced equation?



- A. 4
- B. 5
- C. 6
- D. 7

3. What is the minimum number of grams of O_2 ($M_R = 32$) required to burn 1.6 grams of CH_4 ($M_R = 16$) according to the equation below?



- A. 1.6
- B. 3.2
- C. 6.4
- D. 32

4. How many moles of HCl are in 25 cm^3 of 0.2 mol dm^{-3} hydrochloric acid?

- A. 0.005
- B. 0.008
- C. 5
- D. 8

5. Which species contains 16 protons, 17 neutrons and 18 electrons?

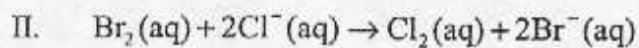
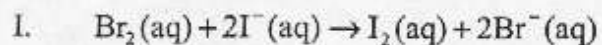
- A. $^{32}\text{S}^-$
- B. $^{33}\text{S}^{2-}$
- C. $^{34}\text{S}^-$
- D. $^{35}\text{S}^{2-}$

6. Values for the **first** ionisation energies (IE) for five successive elements in the Periodic Table are given below. Based on these values, which statement is correct?

Element	K	L	M	N	O	P
IE (kJ mol^{-1})	1060	1000	1260	1520	418	?

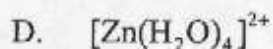
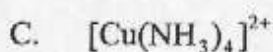
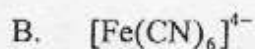
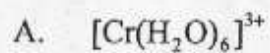
- A. The outermost electron in element K is in a higher energy level than that in element L.
 - B. Element M is probably a metal
 - C. Element N is probably a non-metal
 - D. Element P has a lower first ionisation than element O
7. Spectra have been used to study the arrangements of electrons in atoms. An emission spectrum consists of a series of bright lines that converge at high frequencies. Such emission spectra provide evidence that electrons are moving from
- A. lower to higher energy levels with the higher energy levels being closer together.
 - B. lower to higher energy levels with the lower energy levels being closer together.
 - C. higher to lower energy levels with the lower energy levels being closer together.
 - D. higher to lower energy levels with the higher energy levels being closer together.
8. Which property of alkali metals changes as stated with increasing atomic number?
- A. Atomic radius decreases
 - B. Reactivity with water decreases
 - C. Electronegativity increases
 - D. Melting point decreases

9. Which reaction occurs readily?

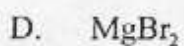
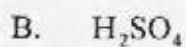



- A. I only
- B. II only
- C. Both I and II
- D. Neither I nor II

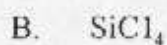
10. Which ion is colourless?



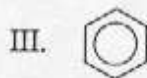
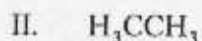
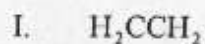
11. Which substance exhibits only ionic bonding?



12. Which molecule or ion does **not** have a tetrahedral shape?



13. When the substances below are arranged in order of increasing carbon-carbon bond length (shortest bond first), what is the correct order?



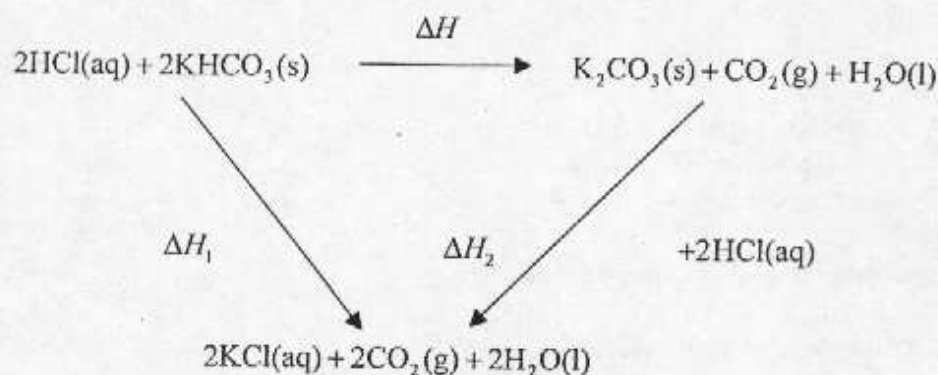
- A. $\text{I} < \text{II} < \text{III}$
- B. $\text{I} < \text{III} < \text{II}$
- C. $\text{II} < \text{I} < \text{III}$
- D. $\text{III} < \text{II} < \text{I}$
14. What type(s) of intermolecular forces is/are present in CH_3OCH_3 ?
- A. dipole-dipole, hydrogen bonds and van der Waals'
- B. dipole-dipole and van der Waals' only
- C. hydrogen bonds and van der Waals' only
- D. van der Waals' only
15. Dry air contains 1 % argon by volume. What is the partial pressure of argon in dry air at one atmosphere pressure (101 kPa)?
- A. 1.01 kPa
- B. 10.1 kPa
- C. 101 kPa
- D. 10100 kPa

16. The boiling points of **four** hydrocarbons are given. Which pair will mix most easily at the temperature specified?

	T_b / K
cyclohexane	354
cycloheptane	392
cyclooctane	421
cyclononane	444

- A. cyclohexane and cycloheptane at 380 K
- B. cycloheptane and cyclooctane at 390 K
- C. cyclooctane and cyclononane at 460 K
- D. cyclononane and cyclohexane at 420 K
17. What changes occur when ice at its melting point is converted to liquid water?
- I. movement of the molecules increases
- II. distance between molecules increases
- A. I only
- B. II only
- C. Both I and II
- D. Neither I nor II

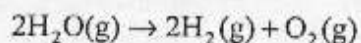
18.



This cycle may be used to determine ΔH for the decomposition of potassium hydrogen carbonate. Which expression can be used to calculate ΔH ?

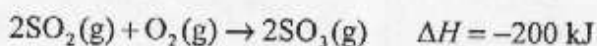
- A. $\Delta H = \Delta H_1 + \Delta H_2$
- B. $\Delta H = \Delta H_1 - \Delta H_2$
- C. $\Delta H = \frac{1}{2} \Delta H_1 - \Delta H_2$
- D. $\Delta H = \Delta H_2 - \Delta H_1$
19. A sodium hydroxide solution is reacted with excess hydrochloric acid. What information is **not** needed to calculate the molar heat of neutralisation of sodium hydroxide?
- A. Initial temperatures of both solutions
- B. Volumes of both solutions
- C. Concentration of the hydrochloric acid solution
- D. Maximum temperature of the mixture
20. Which factor(s) will cause the lattice enthalpy of ionic compounds to increase in magnitude?
- I. an increase in the charge on the ions
- II. an increase in the size of ions
- A. I only
- B. II only
- C. Both I and II
- D. Neither I nor II

21. How would this reaction at 298 K be described in thermodynamic terms?

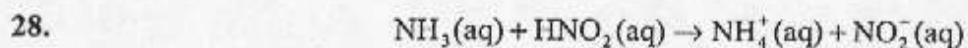


- A. Endothermic with a significant increase in entropy
 - B. Endothermic with a significant decrease in entropy
 - C. Exothermic with a significant increase in entropy
 - D. Exothermic with a significant decrease in entropy
22. The rate of reaction of a strip of magnesium and 50 cm³ of 1 mol dm⁻³ HCl is measured at 25° C. In which case would **both** new conditions contribute to an increase in the rate of reaction?
- A. Mg powder and 100 cm³ of 1 mol dm⁻³ HCl
 - B. Mg powder and 50 cm³ of 0.8 mol dm⁻³ HCl
 - C. 100 cm³ of 1 mol dm⁻³ HCl at 30° C
 - D. 50 cm³ of 1.2 mol dm⁻³ HCl at 30° C
23. The rate constant for a certain reaction has the units **concentration time⁻¹**. What is the order of reaction?
- A. 0
 - B. 1
 - C. 2
 - D. 3
24. The addition of a catalyst to a chemical reaction alters the rate primarily by
- A. changing the enthalpy of the reaction.
 - B. increasing the number of collisions between the reactant molecules in a given time.
 - C. increasing the fraction of reactant molecules with a given kinetic energy.
 - D. providing a different reaction pathway.

25. Chemical equilibrium is referred to as **dynamic** because, at equilibrium, the
- equilibrium constant changes.
 - reactants and products keep reacting.
 - rates of the forward and backward reactions change.
 - concentrations of the reactants and products continue to change.
26. An equimolar mixture of propan-1-ol (bp = 97.4° C) and propan-2-ol (bp = 82.4° C) is boiled in a flask to which a distillation column is attached. What is true about the first sample of vapour that enters the distillation column?
- It is pure propan-1-ol.
 - It is pure propan-2-ol.
 - It contains a higher fraction of propan-1-ol than propan-2-ol.
 - It contains a higher fraction of propan-2-ol than propan-1-ol.
27. Which change(s) will increase the amount of $\text{SO}_3(\text{g})$ at equilibrium?



- Increasing the temperature
 - Decreasing the volume
 - Adding a catalyst
- I only
 - II only
 - I and III only
 - I, II and III



For this reaction, a Brønsted-Lowry acid is

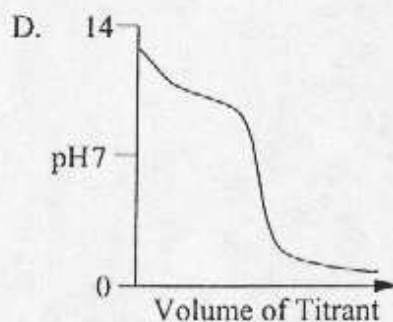
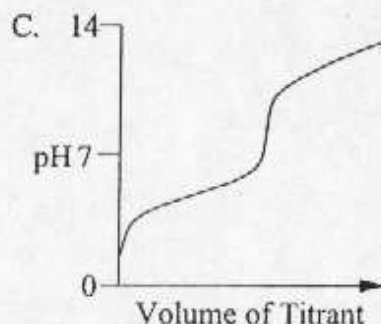
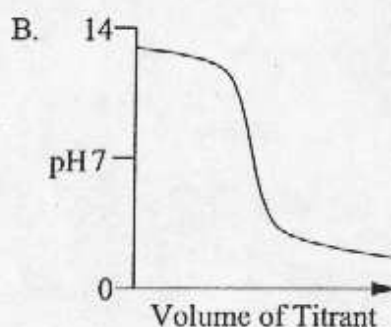
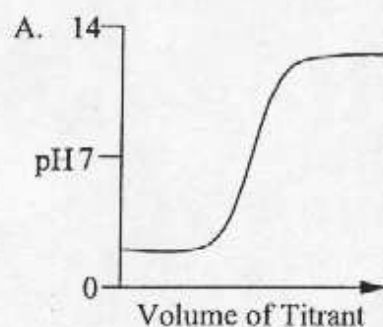
- A. $\text{NH}_3(\text{aq})$ because it contains the largest number of hydrogen atoms.
- B. $\text{NH}_3(\text{aq})$ because it accepts a proton from $\text{HNO}_2(\text{aq})$.
- C. $\text{HNO}_2(\text{aq})$ because it has lone pairs of electrons on the oxygen atoms.
- D. $\text{HNO}_2(\text{aq})$ because it donates a proton to $\text{NH}_3(\text{aq})$.

29. The K_a values of acids HX, HY and HZ are given. What is the correct order when these acids are arranged in order of increasing strength (weakest first)?

$$\text{HX } K_a = 1 \times 10^{-4} \quad \text{HY } K_a = 1 \times 10^{-5} \quad \text{HZ } K_a = 3 \times 10^{-5}$$

- A. $\text{HX} < \text{HY} < \text{HZ}$
- B. $\text{HX} < \text{HZ} < \text{HY}$
- C. $\text{HZ} < \text{HY} < \text{HX}$
- D. $\text{HY} < \text{HZ} < \text{HX}$

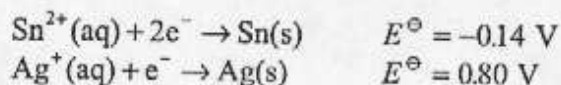
30. Which titration curve represents the titration of a weak base with a strong acid?



31. What is the pH of a buffer solution that contains 0.1 mol dm^{-3} HA and 0.1 mol dm^{-3} NaA?

$$(\text{HA } K_a = 1 \times 10^{-5})$$

- A. pH = 3
 B. pH = 4
 C. pH = 5
 D. pH = 6
32. For which conversion is an oxidising agent required?
- A. $\text{Cl}^-(\text{aq}) \rightarrow \text{OCl}^-(\text{aq})$
 B. $\text{SO}_3(\text{g}) \rightarrow \text{SO}_4^{2-}(\text{aq})$
 C. $2\text{H}^+(\text{aq}) \rightarrow \text{H}_2(\text{g})$
 D. $\text{S}_4\text{O}_6^{2-}(\text{aq}) \rightarrow 2\text{S}_2\text{O}_3^{2-}(\text{aq})$
33. The standard electrode potentials for tin and silver are given. What is the equation for the spontaneous reaction together with its cell potential?

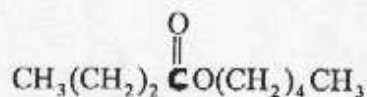


- A. $\text{Sn}^{2+}(\text{aq}) + 2\text{Ag}(\text{s}) \rightarrow \text{Sn}(\text{s}) + 2\text{Ag}^+(\text{aq})$ $E_{\text{cell}} = -1.74 \text{ V}$
 B. $\text{Sn}^{2+}(\text{aq}) + 2\text{Ag}(\text{s}) \rightarrow \text{Sn}(\text{s}) + 2\text{Ag}^+(\text{aq})$ $E_{\text{cell}} = -0.94 \text{ V}$
 C. $\text{Sn}(\text{s}) + 2\text{Ag}^+(\text{aq}) \rightarrow \text{Sn}^{2+}(\text{aq}) + 2\text{Ag}(\text{s})$ $E_{\text{cell}} = +0.94 \text{ V}$
 D. $\text{Sn}(\text{s}) + 2\text{Ag}^+(\text{aq}) \rightarrow \text{Sn}^{2+}(\text{aq}) + 2\text{Ag}(\text{s})$ $E_{\text{cell}} = +1.74 \text{ V}$

34. What mass of oxygen will be produced when a current of 0.2 A is passed through an aqueous solution of sulphuric acid for 1 hour?

- A. $\frac{(96500 \times 32)}{(0.2 \times 60 \times 60)}$
 B. $\frac{(0.2 \times 60 \times 60 \times 32)}{(96500)}$
 C. $\frac{(0.2 \times 60 \times 60 \times 32)}{(2 \times 96500)}$
 D. $\frac{(0.2 \times 60 \times 60 \times 32)}{(4 \times 96500)}$

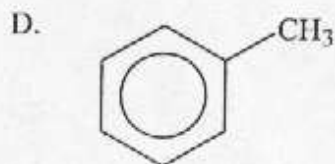
35.



From which **two** chemicals could this compound be synthesised?

- A. butanoic acid and pentan-1-ol
 B. butanoic acid and butan-1-ol
 C. butanal and pentan-1-ol
 D. pentanoic acid and butan-1-ol
36. Which chemical is most likely to be a starting material for a common polymer?

- A. $\text{CH}_3\text{CH}_2\text{CH}_3$
 B. $\text{CH}_3\text{CH}_2\text{OH}$
 C. CH_3CHCH_2



37. 0.1 mol dm⁻³ aqueous solutions of these organic compounds were prepared. When these solutions are arranged in order of increasing pH (lowest pH first), what is the correct order?
- I. CH₃CH₂CH₂OH
 - II. CH₃CH₂CH₂NH₂
 - III. CH₃CH₂COOH
- A. I < II < III
 - B. III < I < II
 - C. II < III < I
 - D. III < II < I
38. How many different hydrogen signals would be present in the ¹H NMR spectrum of 2-chloropropane, CH₃CHClCH₃?
- A. One
 - B. Two
 - C. Three
 - D. Seven
39. What is the major product when an halogenoalkane (alkyl halide) is reacted with a large excess of ammonia?
- A. An amine
 - B. An amide
 - C. A tetraalkyl ammonium halide
 - D. An alkene
40. What type of reaction does benzene, C₆H₆, typically undergo?
- A. Addition
 - B. Elimination
 - C. Reduction
 - D. Substitution